

Maths Homework Y5 Mr Masingiri

Date set: 28.04.22

Date due: 02.04.22

You need to complete both sections

Section 1 -

1. $20 \times 4786 = \underline{\hspace{2cm}}$

2. Divide 546 by 3

3. $12^2 + 6^2 = \underline{\hspace{2cm}}$

4. $\underline{\hspace{2cm}} = 473,932 + 85,937$


5. Order these numbers in
DESCENDING order



4378 4783 3487 4387 3847



6. $MMM - \underline{\hspace{2cm}} = MDLXV$

Section 2

Match the calculations to their answers. Show your working out.

A.  -  = $\frac{2}{3}$

B.  -  = $\frac{1}{3}$

C.  -  = $\frac{1}{2}$



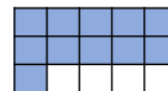
Circle the correct answer in each box.

A. $\frac{5}{6} - \frac{12}{18} =$



$\frac{2}{6}$ $\frac{7}{18}$ $\frac{1}{6}$

B. $\frac{11}{15} - \frac{3}{5} =$



$\frac{8}{15}$ $\frac{2}{15}$ $\frac{2}{5}$



VF

HW/Ext

VF

HW/Ext

Maths Homework Y5 Mr Masingiri

Date set: 28.04.22

Date due: 02.04.22

You need to complete both sections

Section 1 -

1. $20 \times 4786 =$ _____

2. Divide 546 by 3

3. $12^2 + 6^2 =$ _____

4. _____ = $473,932 + 85,937$

5. Order these numbers in
DESCENDING order



4378 4783 3487 4387 3847



6. $MMM -$ _____ $= MDLXV$

Section 2

Match the calculations to their answers. Show your working out.

A.  -  = $\frac{2}{3}$

B.  -  = $\frac{1}{3}$

C.  -  = $\frac{1}{2}$



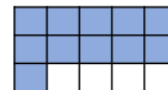
Circle the correct answer in each box.

A. $\frac{5}{6} - \frac{12}{18} =$



$\frac{2}{6}$ $\frac{7}{18}$ $\frac{1}{6}$

B. $\frac{11}{15} - \frac{3}{5} =$



$\frac{8}{15}$ $\frac{2}{15}$ $\frac{2}{5}$



VF

HW/Ext

VF

HW/Ext