

# Maths Homework Y5 Mr Masingiri

Date set: 31.03.22

Date due: 04.04.22

You need to complete both sections

## Section 1 -

1.  $3,536 + 78,536 + 983 =$   
\_\_\_\_\_

2. Divide 789 by 10, 100 and 1000

3.  $4^3 - \text{_____} = 6^2$

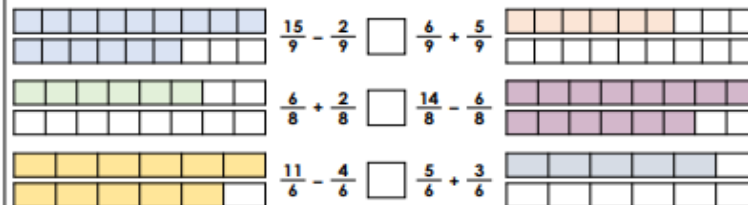
4.  $4,972 \times 87$

5. Write all the factors of 24


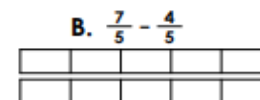
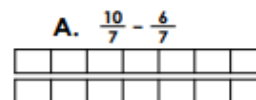
	808,080
?	330,922

## Section 2

4. Insert  $<$ ,  $>$  or  $=$  to make the statements correct. Use the bar models to help you.



5. Which calculation is the odd one out? Complete the bar models to help you.



6. Serena and Chuck are adding fractions.



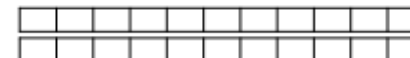
I think  $\frac{8}{11} + \frac{4}{11}$  equals  $\frac{11}{11}$ .

Serena

I think  $\frac{8}{11} + \frac{4}{11}$  equals  $1\frac{1}{11}$ .



Chuck



Who is correct? Explain your answer.

