

Maths Homework Y5 Mr Masingiri

Date set: 17.03.22

Date due: 21.03.22

You need to complete both sections

Section 1 -

1. $658,492 + 367,897 =$ _____

2. $34 \times 869 =$ _____

3. $11^2 + 5^3 =$ _____


4. $5,490 =$ _____ $\times 6$

5. Write 3 multiples of 7 between 50 and 100


6. I am thinking of a number. If I multiply my number by 5 and then multiply the product by 100, the answer is 3,500. What number am I thinking of?

Section 2

4. Convert the mixed numbers to improper fractions and use $<$, $>$ or $=$ to complete the comparison statement.

A.  $3 \frac{3}{4} =$



 \square $\frac{14}{4}$



B.  $5 \frac{4}{7} =$

 \square $\frac{59}{7}$



5. Identify the missing numbers.

A. $4 \frac{5}{6} =$  

B. $5 \frac{3}{9} =$  



6. Raymond says,



Raymond

I think $3 \frac{7}{8}$ equals $\frac{21}{8}$.



Is he correct? Explain your answer.



Maths Homework Y5 Mr Masingiri

Date set: 17.03.22

Date due: 21.03.22

You need to complete both sections

Section 1 -

1. $658,492 + 367,897 =$ _____

2. $34 \times 869 =$ _____

3. $11^2 + 5^3 =$ _____


4. $5,490 =$ _____ $\times 6$

5. Write 3 multiples of 7 between 50 and 100


6. I am thinking of a number. If I multiply my number by 5 and then multiply the product by 100, the answer is 3,500. What number am I thinking of?

Section 2

4. Convert the mixed numbers to improper fractions and use $<$, $>$ or $=$ to complete the comparison statement.

A.  $3 \frac{3}{4} =$



 \square $\frac{14}{4}$



B.  $5 \frac{4}{7} =$

 \square $\frac{59}{7}$



5. Identify the missing numbers.

A. $4 \frac{5}{6} =$  

B. $5 \frac{3}{9} =$  



6. Raymond says,



Raymond

I think $3 \frac{7}{8}$ equals $\frac{21}{8}$.



Is he correct? Explain your answer.

