

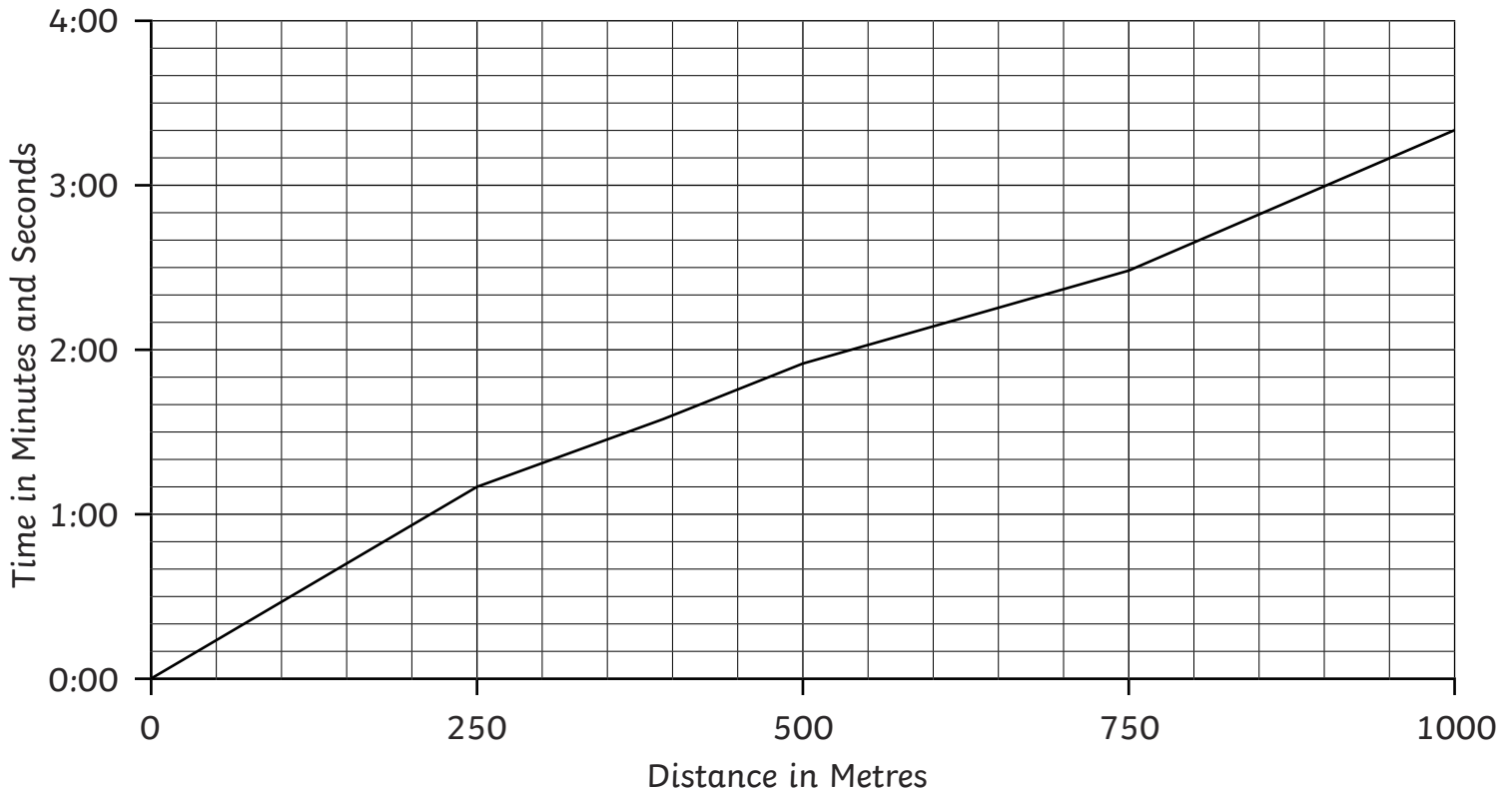


Running Line Graphs

I can answer questions about data presented in a line graph.



A Line Graph to Show Harriet's 1000m Running Time



- 1) Approximately how long did it take Harriet to run 750m?

- 2) Approximately how long did it take Harriet to run 250m?

- 3) Approximately how long did it take Harriet to run 1000m?

- 4) Approximately how many metres had Harriet run by 2 minutes and 20 seconds?

- 5) Approximately how many metres had Harriet run by 1 minute?

- 6) Approximately how many metres had Harriet run by 3 minutes?

- 7) Approximately how many seconds did it take Harriet to run from 200m to 400m?

- 8) Approximately how many seconds did it take Harriet to run from 550m to 750m?

- 9) Approximately how many seconds did it take Harriet to run from 750m to 1000m?



Running Line Graphs Answers

Question	Answer
1.	Approximately how long did it take Harriet to run 750m?
	2 minutes and 30 seconds
2.	Approximately how long did it take Harriet to run 250m?
	1 minute and 10 seconds
3.	Approximately how long did it take Harriet to run 1000m?
	3 minutes and 20 seconds
4.	Approximately how many metres had Harriet run by 2 minutes and 20 seconds?
	700m
5.	Approximately how many metres had Harriet run by 1 minute?
	200m
6.	Approximately how many metres had Harriet run by 3 minutes?
	900m
7.	Approximately how many seconds did it take Harriet to run from 200m to 400m?
	40 seconds
8.	Approximately how many seconds did it take Harriet to run from 550m to 750m?
	30 seconds
9.	Approximately how many seconds did it take Harriet to run from 750m to 1000m?
	50 seconds

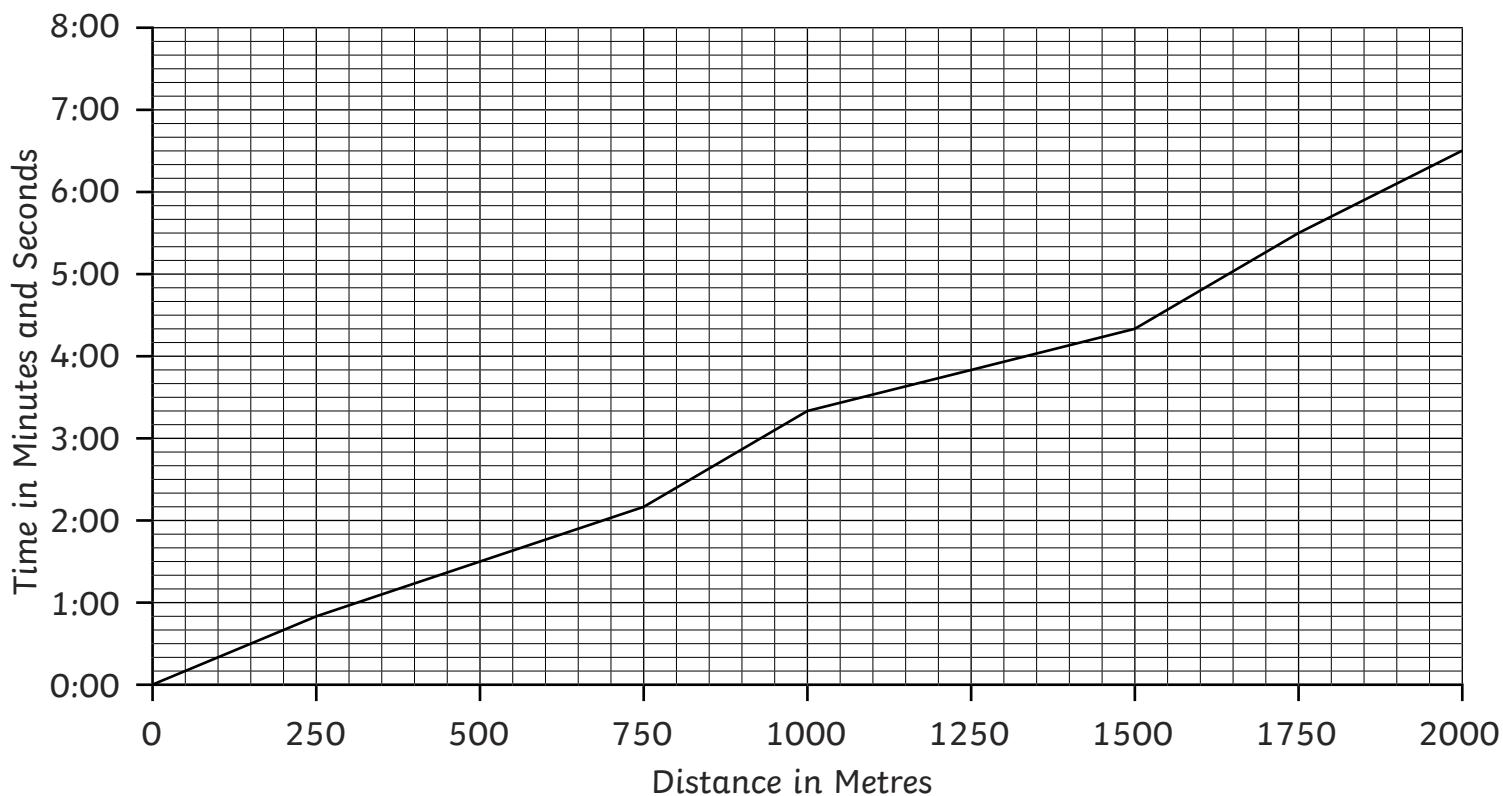


Running Line Graphs

I can answer questions about data presented in a line graph.



A Line Graph to Show Joshua's 2000m Running Time



- 1) Approximately how long did it take Joshua to run 1000m?

- 2) Approximately how long did it take Joshua to run 1250m?

- 3) Approximately how long did it take Joshua to run 750m?

- 4) Approximately how many metres had Joshua run by minute 2?

- 5) Approximately how many metres had Joshua run by 4 minutes and 30 seconds?

- 6) Approximately how many metres had Joshua run by 1 minute and 50 seconds?

- 7) Approximately how many seconds did it take Joshua to run from 250m to 500m?

- 8) Approximately how many seconds did it take Joshua to run from 700m to 900m?

- 9) Approximately how many seconds did it take Joshua to run from 1150m to 1350m?



Running Line Graphs Answers

Question	Answer
1.	Approximately how long did it take Joshua to run 1000m?
	3 minutes and 20 seconds
2.	Approximately how long did it take Joshua to run 1250m?
	3 minutes and 50 seconds
3.	Approximately how long did it take Joshua to run 750m?
	2 minutes and 10 seconds
4.	Approximately how many metres had Joshua run by minute 2?
	700m
5.	Approximately how many metres had Joshua run by 4 minutes and 30 seconds?
	1550m
6.	Approximately how many metres had Joshua run by 1 minute and 50 seconds?
	650m
7.	Approximately how many seconds did it take Joshua to run from 250m to 500m?
	40 seconds
8.	Approximately how many seconds did it take Joshua to run from 700m to 900m?
	50 seconds
9.	Approximately how many seconds did it take Joshua to run from 1150m to 1350m?
	20 seconds

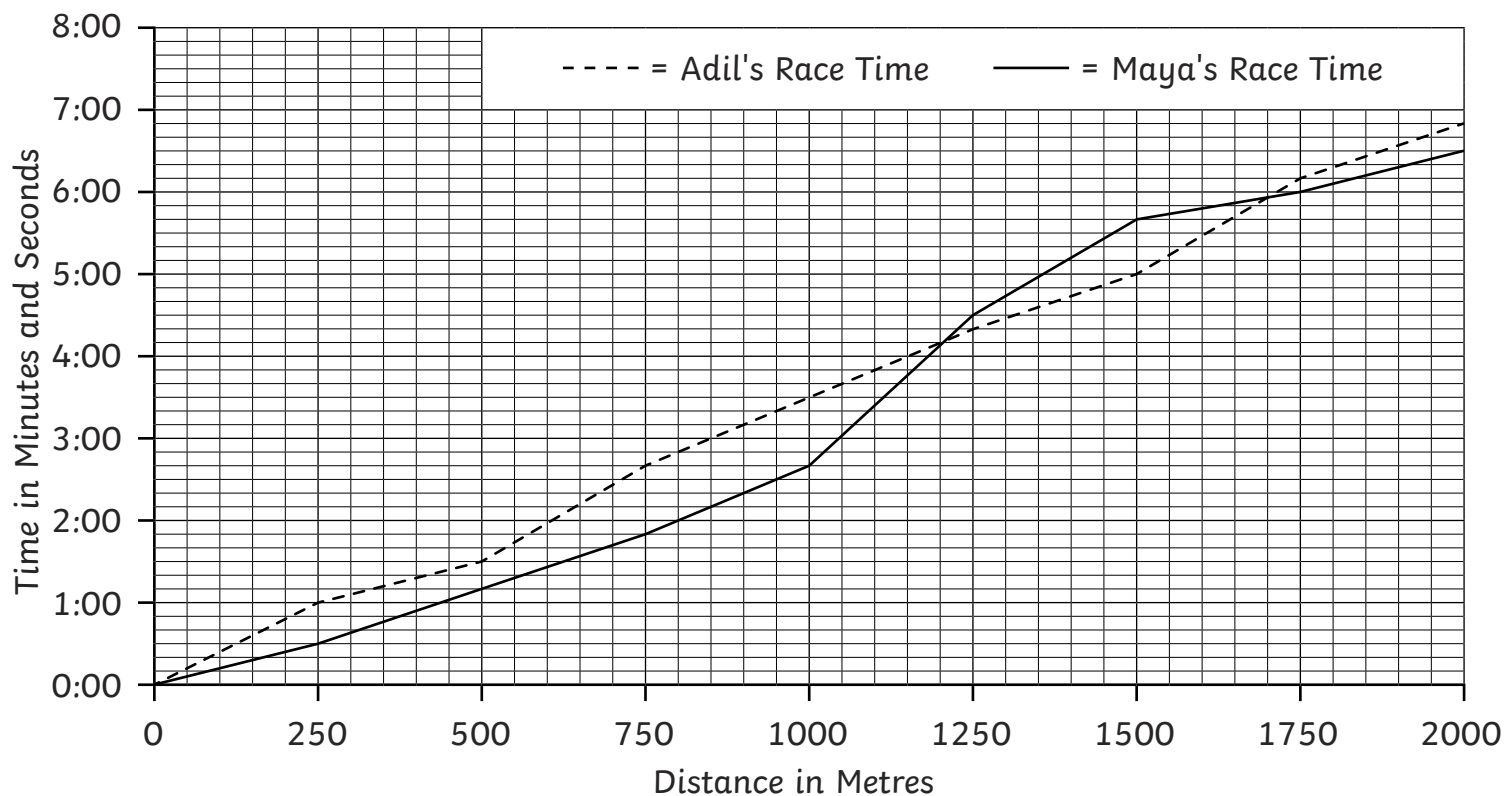


Running Line Graphs

I can answer questions about data presented in a line graph.



A Line Graph to Show Adil and Maya's 2000m Running Times



- 1) Approximately how long did it take Adil to run 500m?

- 2) Approximately how long did it take Maya to run 750m?

- 3) Approximately how many metres had Adil run by 3 minutes and 40 seconds?

- 4) Approximately how many metres had Maya run by 2 minutes and 30 seconds?

- 5) Approximately how many seconds did it take Adil to run from 500m to 750m?

- 6) Approximately how many seconds did it take Maya to run from 1000m to 1250m?

- 7) Who ran 1500m in the quickest time?

- 8) Who ran from 500m to 1000m in the quickest time?

- 9) What was the difference between Adil and Maya's running times at 1500m?



Running Line Graphs Answers

Question	Answer
1.	Approximately how long did it take Adil to run 500m?
	<i>1 minute and 30 seconds</i>
2.	Approximately how long did it take Maya to run 750m?
	<i>1 minute and 50 seconds</i>
3.	Approximately how many metres had Adil run by 3 minutes and 40 seconds?
	<i>1050m</i>
4.	Approximately how many metres had Maya run by 2 minutes and 30 seconds?
	<i>950m</i>
5.	Approximately how many seconds did it take Adil to run from 500m to 750m?
	<i>70 seconds</i>
6.	Approximately how many seconds did it take Maya to run from 1000m to 1250m?
	<i>100 seconds</i>
7.	Who ran 1500m in the quickest time?
	<i>Adil</i>
8.	Who ran from 500m to 1000m in the quickest time?
	<i>Maya</i>
9.	What was the difference between Adil and Maya's running times at 1500m?
	<i>40 seconds</i>